

Finding a part

Discover



1 There are 8 children.

a) 5 children each get an .

How many children get a ?

b) Tomorrow 2 children will get a ,

2 will get a and the rest will get an .

How many children will get an ?

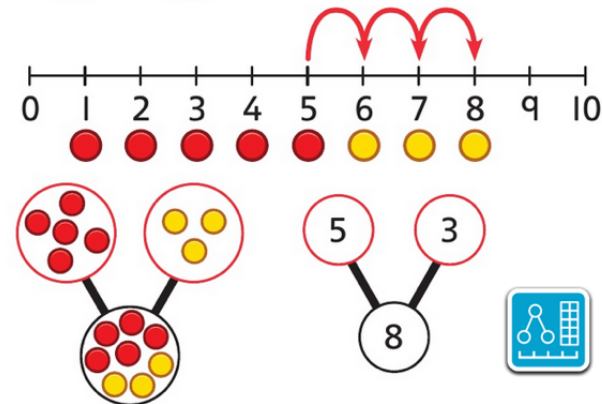


Share

a) $5 \text{ } + 3 \text{ } = 8$



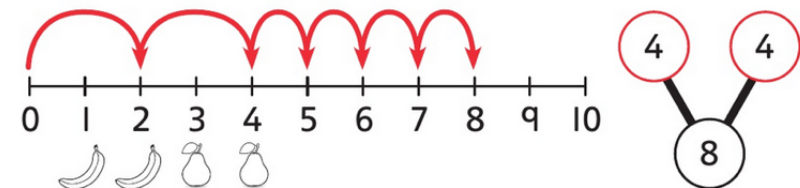
Use 1 for each piece of fruit.



$5 + 3 = 8$

There are 3 .

b) $2 \text{ } + 2 \text{ } = 4 \rightarrow 4 + 4 \text{ } = 8$

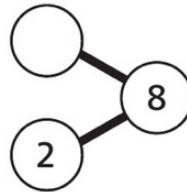
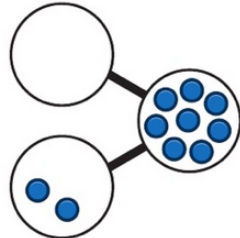


There are 4 .

Think together

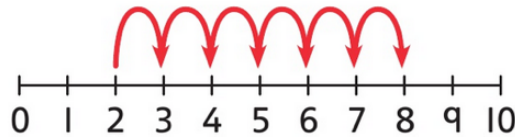
- 1 There are 8 pieces of fruit altogether.


How many  are there?



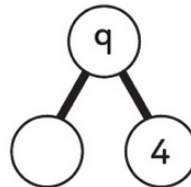
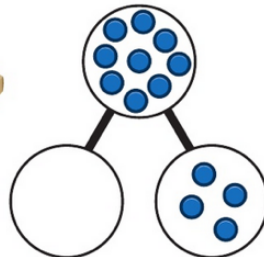
$$2 + \square = 8$$

There are \square .



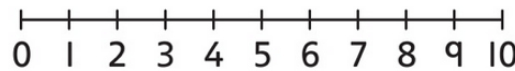
- 2 There are 9 pens and  altogether.

How many  are there?




$$4 + \square = 9$$

There are \square .



- 3 Find the **missing part**.

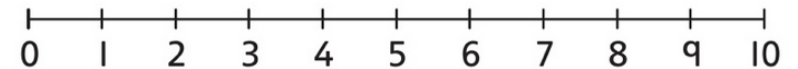
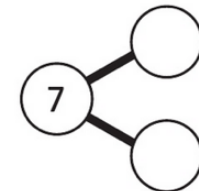
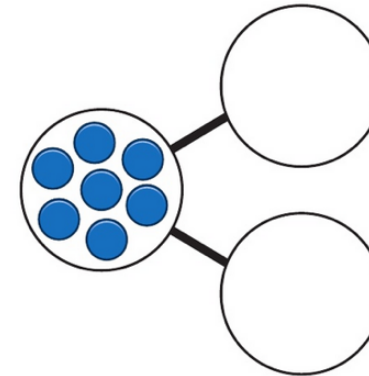
Use the  and number line to help you.

a) $5 + \square = 7$

$\square + 5 = 7$

b) $3 + \square = 7$

$\square + 3 = 7$



Do I need to work out all four answers?



