

2

Price list	
Small loaf	£2
Roll	£1
Large loaf	£3
Cake	£5

Match each multiplication to its story.

$5 \times 3$

Cost of 6 rolls

$2 \times 5$

Cost of 3 cakes

$6 \times 1$

Cost of 5 large loaves

$5 + 5 + 5$


Cost of 1 cake

$1 \times 5$

Cost of 2 cakes

3

Draw your own picture story for  $2 \times 4$ .

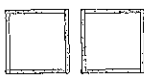


4


Match each multiplication to its story.



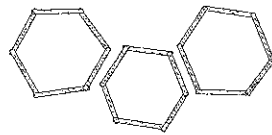
$6 \times 3$



$4 \times 3$



$2 \times 4$



$3 \times 6$

5


Are there more  or  ?

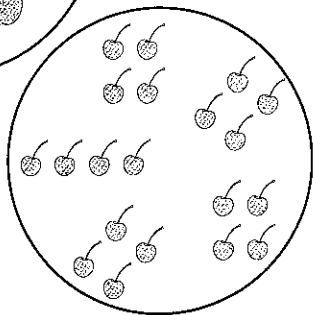
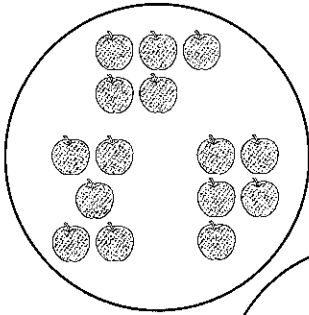
$\times$

$>$

$\times$

There are more





Reflect

Tell your partner a story for  $2 \times 5$  and a story for  $5 \times 2$ .

What does the 5 mean in each story?