


## Dividing by 2

- 1 How many pairs of swans are in the pond?




$$8 \div 2 = \square$$

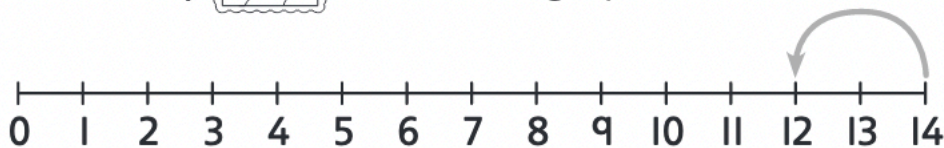
There are  pairs of swans.



- 2 There are 14 pegs. They are used to hang  .

2 pegs hang each  .

How many  can be hung up?



$$14 \div \square = \square$$

 can be hung up.