

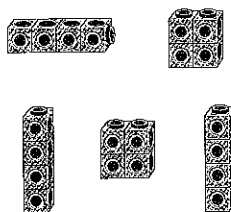




- 5 These children have 20 cubes each.
Tick the cubes that are in equal groups.



Reflect

There are 18 paper clips in total.

Jed has made a chain.

How many chains can he make of the same length?

