

# Making equal groups 1

- 1 a) Circle groups of 2 horses.



How many groups of 2 horses are there?


- b) Circle groups of 3 sheep.



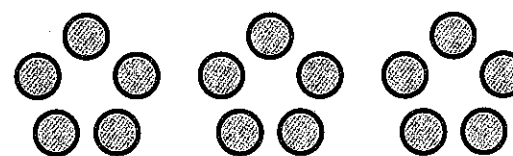
How many groups of 3 sheep are there?

- 2 There are 18 bees in total.

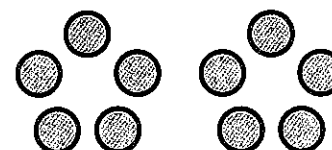
How many groups of 3 bees are there?



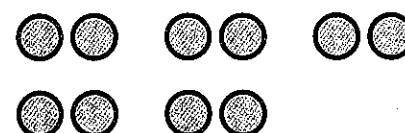
- 3 Join each set of counters to the correct description.



10 has been put into groups of 5.



There are 15 counters in groups of 3.



This is 15 sorted into groups of 5.



10 is sorted into groups of 2.

- 4 Draw 3 groups of 2 stars.

