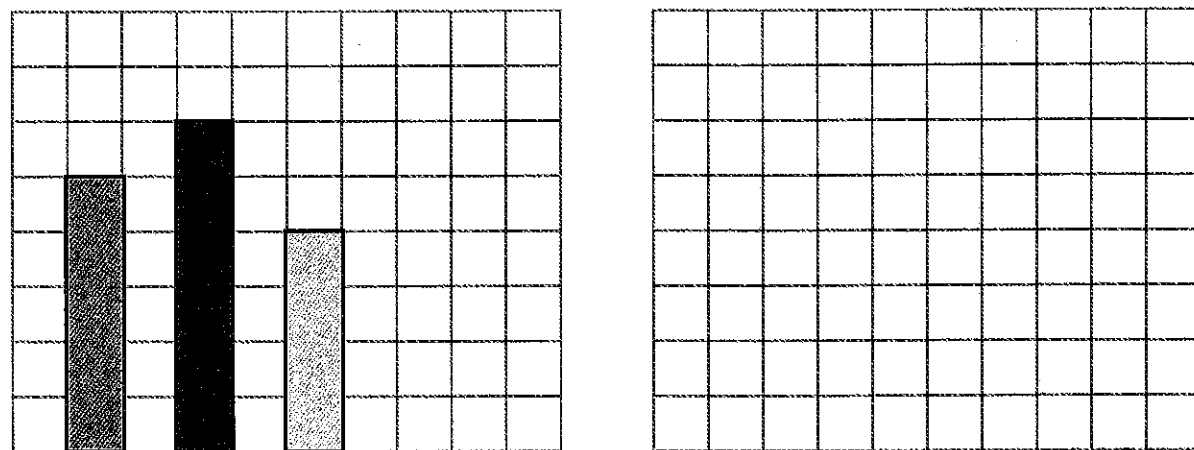
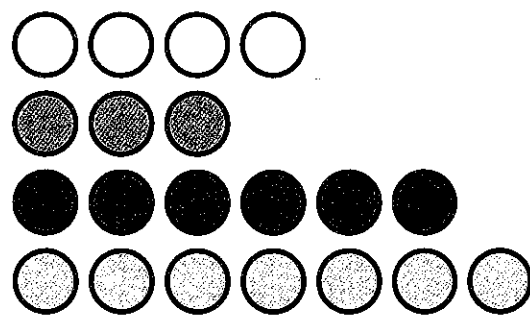


# The mean 1


- 1 a) Draw three new towers that show the mean height of these three towers.



- b) Draw four new rows of counters that show the mean length.




- 2 What is the mean number of marbles in the bags?




- 3 Match groups of dice that have the same mean number of dots.


A




C



B



D



- 4 Calculate the mean of each set of measurements.

a) 10 cm, 20 cm, 30 cm, 40 cm

b) 100 ml, 200 ml, 300 ml, 400 ml

c) 101 kg, 201 kg, 301 kg, 401 kg

- 5 Circle the group with the greatest mean.

A 

4	1	1	2
---	---	---	---

C 

2	0	1	0	1	0	0	0
---	---	---	---	---	---	---	---

B 

2	0	0	2
---	---	---	---

D 

1	0	1	0	1	0	1
---	---	---	---	---	---	---