

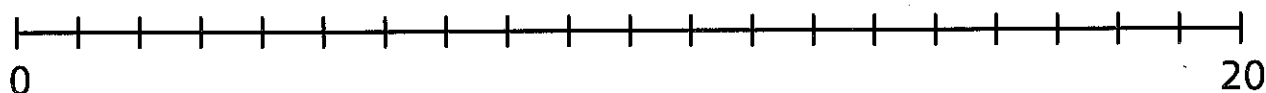
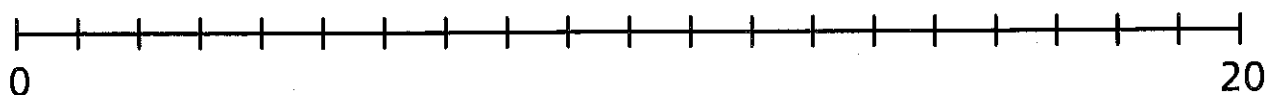
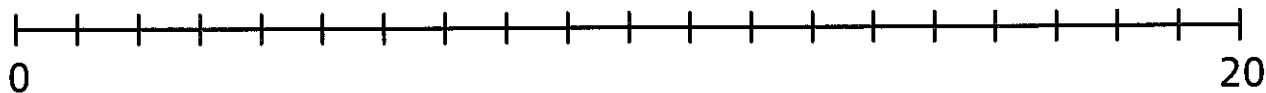
4 Which makes the most groups?



$20 \div 5$

$20 \div 10$

$20 \div 2$





$\div$   makes the most groups.

This is because \_\_\_\_\_.

## Reflect

There are 15 .

5  fit on one tray.



Write a division to show how many trays are needed.

$\boxed{\phantom{00}} \div \boxed{\phantom{00}} = \boxed{\phantom{00}}$

Show it on a number line.

